

Grade 1

Term 1

Week 1—4

Mathematics Assessment

Name: _____


Total 30

1. Draw a triangle and colour it red. (2)

2. Draw a square and colour it yellow. (2)

3. Draw a circle and colour it blue. (2)

4. Trace the pattern with a blue pencil. (2)

















5. Write the correct number name next to the number: (5)







1	
2	
3	
4	
5	

two	five	four	one	three
-----	------	------	-----	-------

6. Trace the numbers and match the columns: (17)

 1 1 1		1
1 1 1 1		
1 1 1 1		
1 1 1 1	1	

 2 2 2		2
2 2 2		
2 2 2		
2 2 2	2	

 3 3 3		3
3 3 3		
3 3 3		
3 3 3	3	