

# Grade I Mathematics

## Term 2

### Assessment Week 5, 6 and 7 (Total 35 Marks)

Name: \_\_\_\_\_

1. Write down the number which comes before, between or after the given number. (5)

before	between	after
	2	3
6		8
	9	

2. Complete the sequence: (3)

1, 2, \_\_\_\_\_, 4, 5, \_\_\_\_\_, 7, 8, \_\_\_\_\_, 10, 11, \_\_\_\_\_, \_\_\_\_\_, 14, \_\_\_\_\_

3. Fill in the correct answers: (10)

1.	$4 + 1 =$		6.	$3 + 6 =$	
2.	$6 + 1 =$		7.	$9 + 2 =$	
3.	$8 + 1 =$		8.	$10 + 3 =$	
4.	$0 + 1$		9.	$0 + 8 =$	
5.	$5 + 2$		10.	$13 + 1 =$	

4. Fill in the correct answers: (5)

1.	$8 - 1 =$	
2.	$10 - 1 =$	
3.	$5 - 2 =$	
4.	$1 - 1 =$	
5.	$12 - 4 =$	

5. Double the following numbers: (4)





Double 1 is \_\_\_\_\_ Double 2 is \_\_\_\_\_

Double 3 is \_\_\_\_\_ Double 4 is \_\_\_\_\_


6. halve the following numbers: (2)

Half of 2 is \_\_\_\_\_ Half of 4 is \_\_\_\_\_

7. Complete the pattern: (2)

							
1	3	1	3				

8. Circle the heaviest object: (2)



9. Lebo has 2 dogs, 1 cat and 1 bird. How many pets does he have?

(2) \_\_\_\_\_

